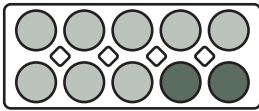
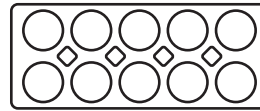


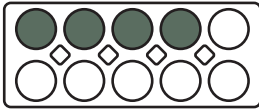
Fülle die Kästchen und rechne über den Zehner!



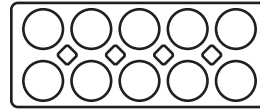
$$8 + 6 = 14$$



$$7 + 5 = \square$$



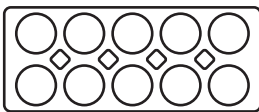
$$8 + 2 = 10$$



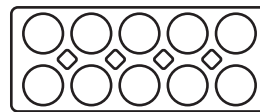
$$7 + \square = 10$$

$$10 + 4 = 14$$

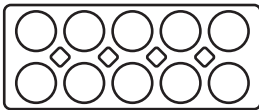
$$10 + \square = \square$$



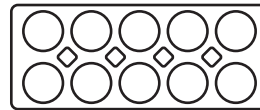
$$9 + 4 = \square$$



$$8 + 8 = \square$$



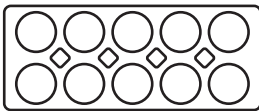
$$9 + \square = 10$$



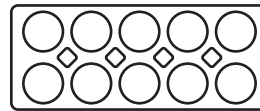
$$8 + \square = 10$$

$$10 + \square = \square$$

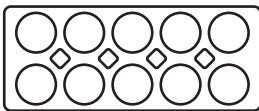
$$10 + \square = \square$$



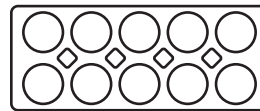
$$4 + 9 = \square$$



$$6 + 8 = \square$$




$$4 + \square = 10$$



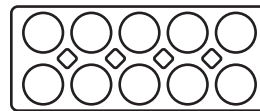
$$1 + \square = 10$$

$$10 + \square = \square$$

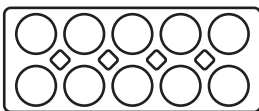
$$10 + \square = \square$$



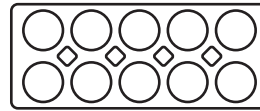
$$5 + 7 = \square$$



$$9 + 2 = \square$$



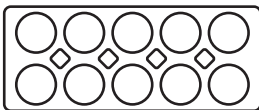
$$\square + \square = 10$$



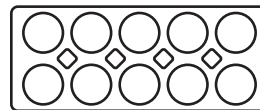
$$\square + \square = 10$$

$$\square + \square = \square$$

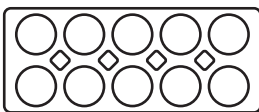
$$\square + \square = \square$$



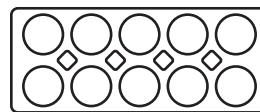
$$8 + 6 = \square$$



$$6 + 5 = \square$$



$$\square + \square = 10$$



$$\square + \square = 10$$

$$\square + \square = \square$$

$$\square + \square = \square$$

